
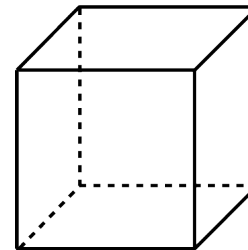
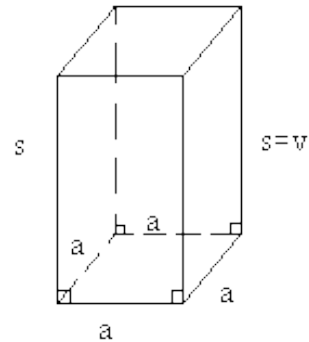
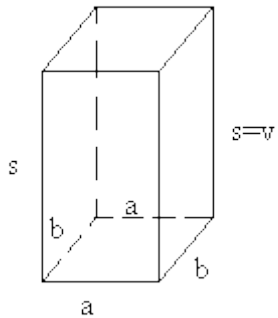
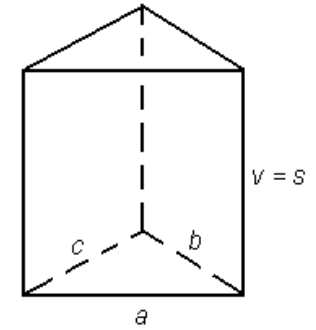
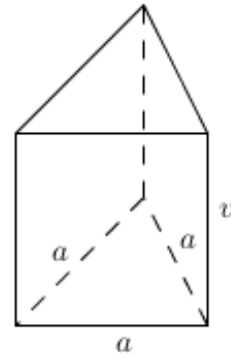
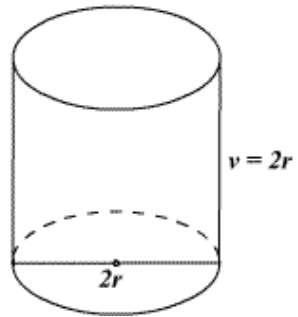
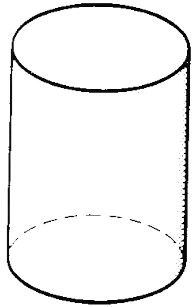


1. Poimenuj naslednja geometrijska telesa. Pobarvaj osnovne ploskve, označi osnovni rob in stranski rob !



2. Izračunaj površino in prostornino kocke z robom 6 cm. Obvezna skica !!!

3. Izračunaj površino in prostornino kvadra z robovi 5 cm, 3 cm in 10 cm. Obvezna skica !!!