



Štirikotniki



pravokutnik




kvadrat



deltoid



paralelogram



romb



trapez

S pomočjo gornje slike in učnega lista z datumom 15.5.2020 poimenuj naslednje like !



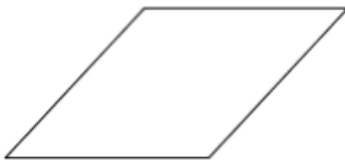
\_\_\_\_\_



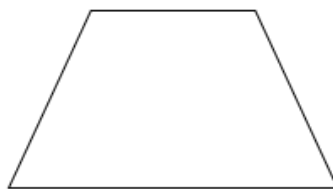
\_\_\_\_\_



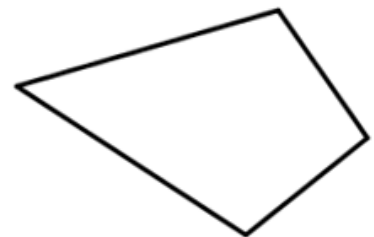
\_\_\_\_\_



\_\_\_\_\_

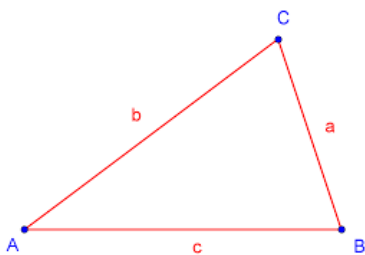


\_\_\_\_\_

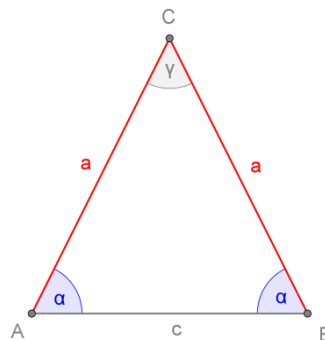


\_\_\_\_\_

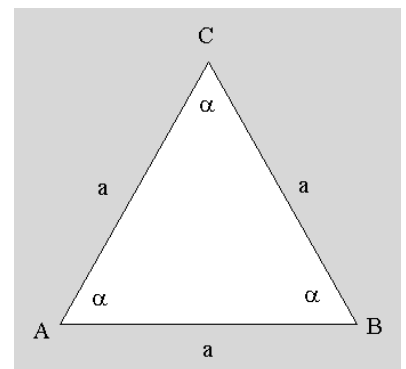
Poimenuj naslednje trikotnike glede na dolžino stranic !



trikotnik



trikotnik



trikotnik

Izračunaj s pomočjo kalkulatorja !

$20 \% \text{ od } 400 \$ = \underline{\hspace{2cm}}$

$250 \text{ kg od } 1500 \text{ kg} = \underline{\hspace{1cm}}\%$

$40 \% \text{ od } 1800 \text{ m} = \underline{\hspace{2cm}}\text{m}$

$150 \text{ l od } 2400 \text{ l} = \underline{\hspace{1cm}}\%$

Športni copati so bili pred pocenitvijo 65 evrov. Sedaj so jih pocenili za 15 %. Koliko stanejo sedaj ?

Odgovor: \_\_\_\_\_

Pripravila: Martina Križnik