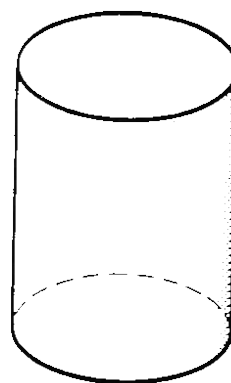
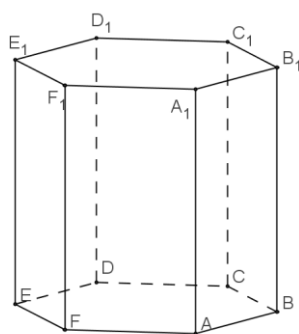
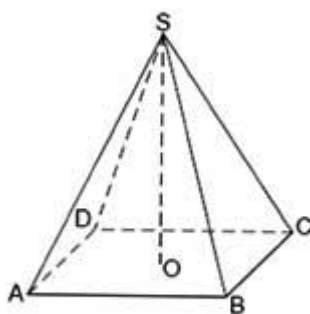
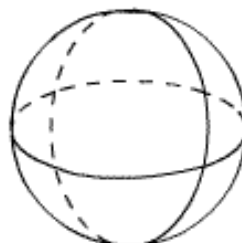
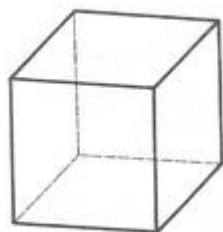
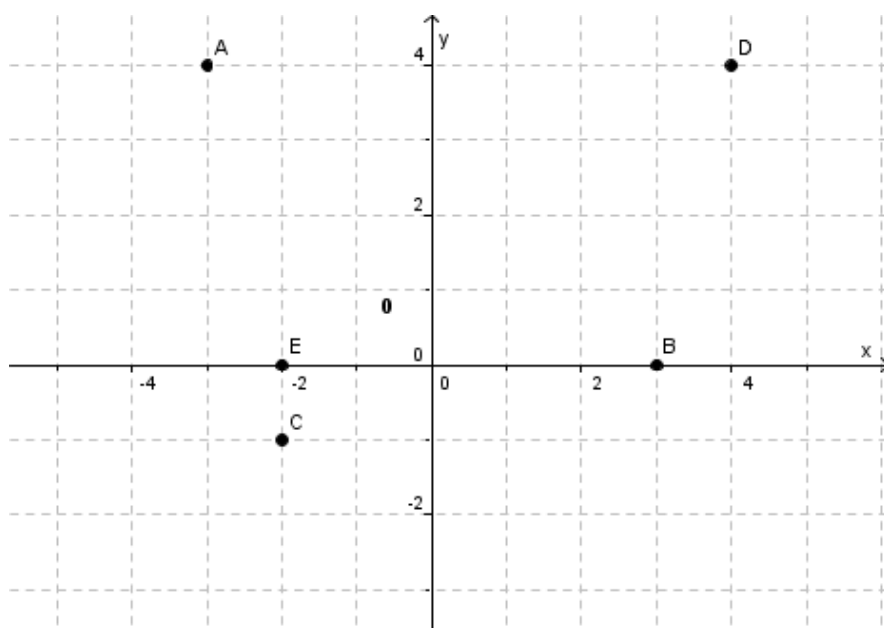


PONOVI TEV

1. Poimenuj naslednja geometrijska telesa in pobarvaj osnovno ploskev !



2. Odčitaj koordinate naslednjih točk !



A(__, __)

B(__, __)

C(__, __)

D(__, __)

E(__, __)

3. a) Kako preberemo zapis :

$$3 : 5 \underline{\hspace{10cm}}$$

b) Okrajšaj razmerja:

$$16 : 8 = \underline{\hspace{2cm}}$$

$$24 : 36 = \underline{\hspace{2cm}}$$

$$7 : 21 = \underline{\hspace{2cm}}$$

$$2 : 4 = \underline{\hspace{2cm}}$$

4. Izračunaj neznani člen sorazmerja !

$$3 : x = 9 : 24$$

$$x : 8 = 5 : 4$$

$$8 : 40 = 2 : x$$

Prpravila: Martina Križnik