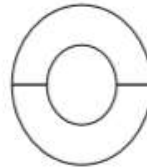
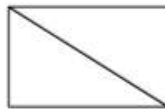


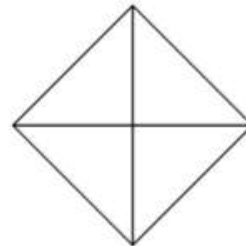
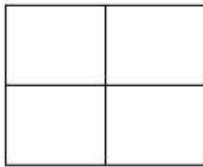
## PREDMET: MATEMATIKA

### DELI CELOTE

1. Pobarvaj polovico lika.



2. Pobarvaj četrtnino lika.



### GEOMETRIJA

1. Na črto zapiši ime lika.



\_\_\_\_\_



\_\_\_\_\_



\_\_\_\_\_



\_\_\_\_\_

## OSNOVNE RAČUNSKE OPERACIJE

1. Vpiši manjkajoče računske znake +, -, ., ., :!

$7 \bigcirc 4 = 3$

$8 \bigcirc 5 = 40$

$5 \bigcirc 10 = 50$

$10 \bigcirc 5 = 15$

$7 \bigcirc 7 = 49$

$20 \bigcirc 4 = 5$

$25 \bigcirc 10 = 15$

$49 \bigcirc 7 = 7$

$16 \bigcirc 4 = 20$

2. Dopolni!

$18 = \square . 3$

$10 = \square . 5$

$30 = 5 . \square$

$9 . \square = 18$

$7 . \square = 42$

$6 . \square = 36$

3. Iz števil 4, 5, 20 zapiši 4 račune.

\_\_\_\_\_

Vir: <https://www.otroci.org/ucni-listi>